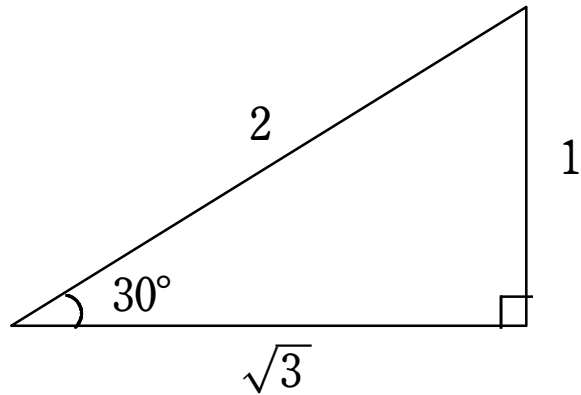


56 【 30° , 45° , 60° の三角比】 $1/2$ ページ

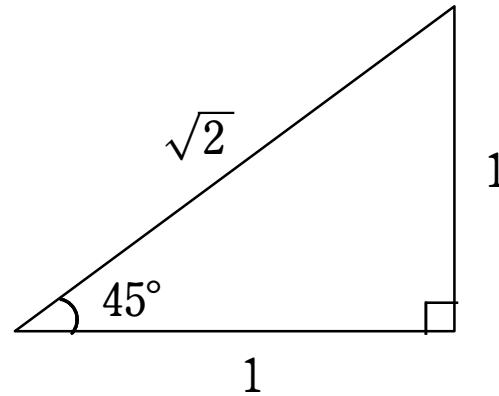
例題 次の三角比の値を求めよ。

(1) $\sin 30^\circ$



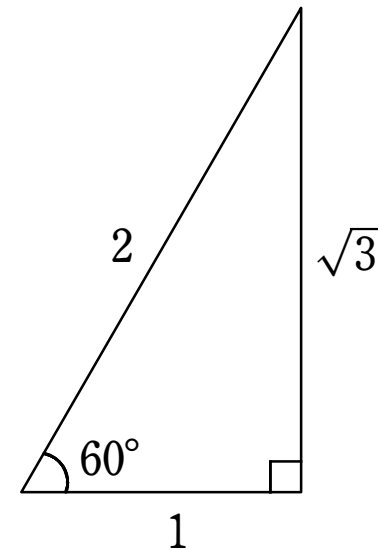
$\sin 30^\circ =$

(2) $\cos 45^\circ$



$\cos 45^\circ =$

(3) $\tan 60^\circ$



$\tan 60^\circ =$

$=$

| A | 30° | 45° | 60° |
|----------|------------|------------|------------|
| $\sin A$ | | | |
| $\cos A$ | | | |
| $\tan A$ | | | |